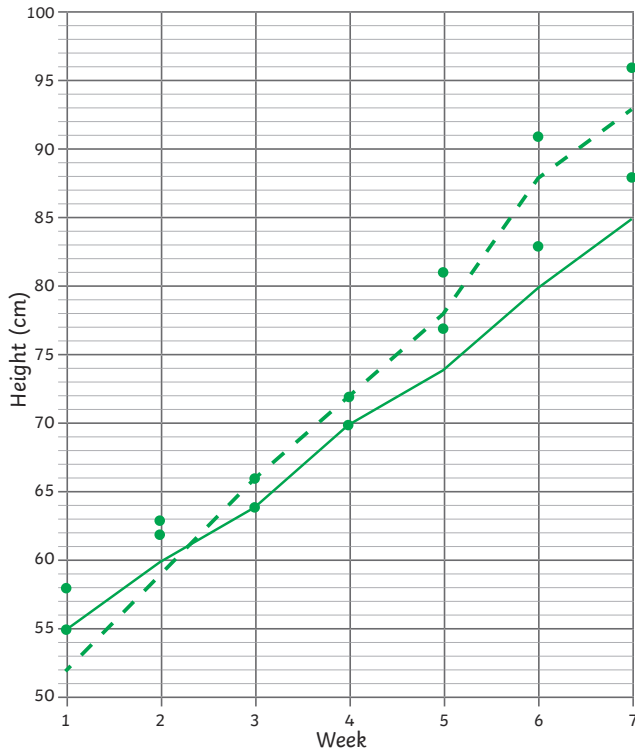




1) A line graph to show *the growth of class 5's and class 6's sunflowers*

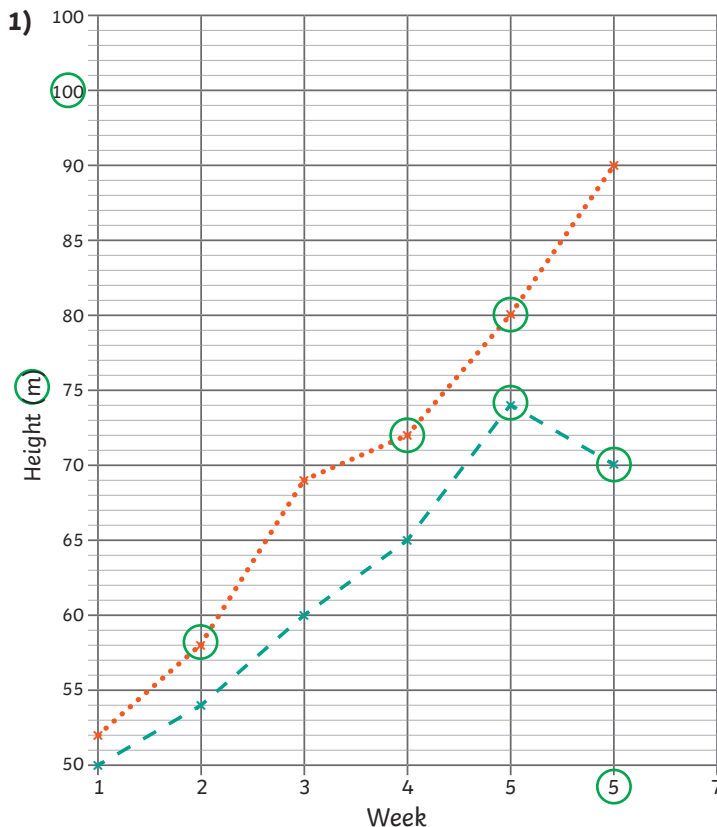


Key:

- Class 6 Sunflower
- -•- - Class 5 Sunflower

2) A key / legend.

Check that plots are plotted correctly on the line graph, and the sets of data are labelled using a key/legend.



Key:

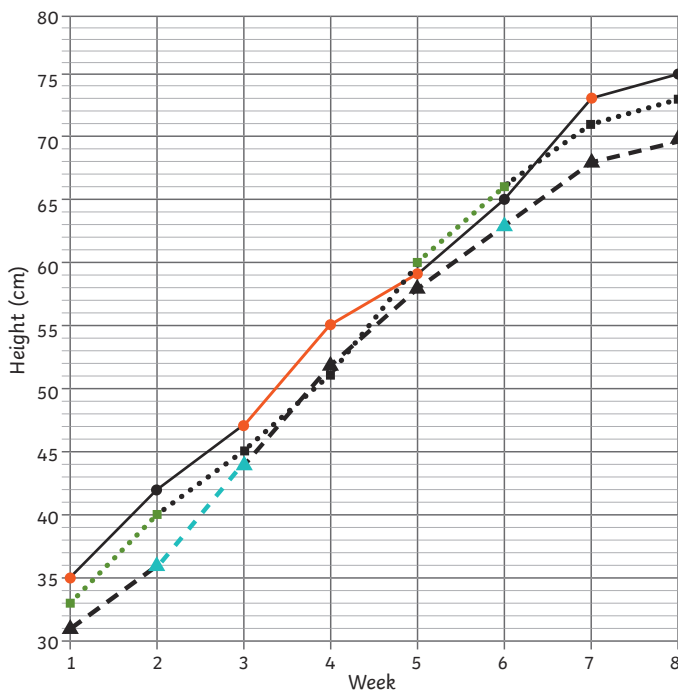
- - * - - Height of Sunflower 1
- * Height of Sunflower 2

- Rami has mixed up the labels in the key. The dashed line should be labelled 'Height of Sunflower 2'.
- The dotted line in the key should be labelled 'Height of Sunflower 1'.
- He has mislabelled the numbers on the x-axis. It should say 5, 6, 7.
- He has mislabelled the numbers on the y-axis. It should say 90, 100, 110.
- The label on the y-axis should say height (cm), not height (m).
- In Week 2, the height of sunflower 1 should be plotted at 57cm, but he has plotted it at 58cm.
- In Week 4, the height of sunflower 1 should be plotted at 73cm, but he has plotted it at 72cm.
- In Week 5, the height of sunflower 1 should be plotted at 81cm, but he has plotted it at 80cm.
- In Week 5, the height of sunflower 2 should be plotted at 75cm, but he has plotted it at 74cm.
- In Week 6, the height of sunflower 2 should be plotted at 80cm, but he has plotted it at 70cm.

2) Answers will vary. Look for understanding that Rami should be more careful when labelling the numbers on the axes and writing keys and labels. He should check that he has plotted the numbers on the graph at the correct points.



●●●■●●● Daisy's Sunflower
 -▲- Marlon's Sunflower
 —●— Rami's Sunflower



Week	Daisy's Sunflower	Marlon's Sunflower	Rami's Sunflower
1	33	31	35
2	40	36	42
3	45	44	47
4	51	52	55
5	60	58	59
6	66	63	65
7	71	68	73
8	73	70	75